


II. Ułamki zwykłe

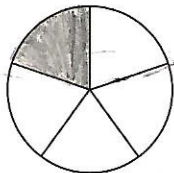
1. Zapisywanie i czytanie ułamków

1. Rozwiąż rebus.

.....




2. Jaką część figury pomalowano?

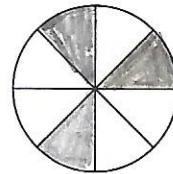


$\frac{1}{5}$


.....




.....




.....



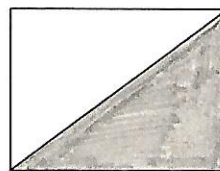
.....



.....



.....



.....




.....

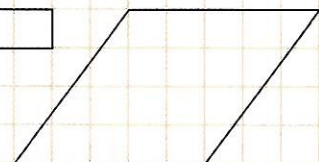
3. Pomaluj odpowiednią część figury.



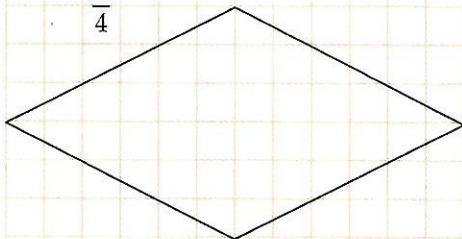
$\frac{1}{4}$



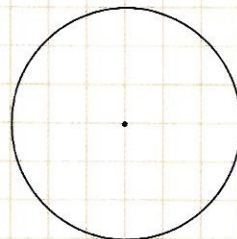
$\frac{2}{3}$



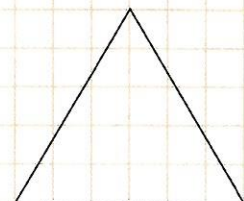
$\frac{1}{4}$



$\frac{3}{4}$



$\frac{5}{8}$



$\frac{1}{2}$